



08.03.18

Year 4

1. Read your reading book for 20 minutes each night.
2. Practise your times tables for 10 minutes each night on hit the button and complete your maths worksheet.
3. Practise your spellings.
4. If you can, play mathletics for about 10 minutes each night.
5. Practise your Ukulele every night for 5-10 minutes

Spellings:

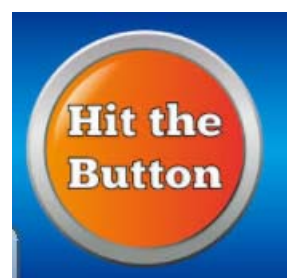
weight	popular	breathe	exercise
purpose	various	extreme	although
therefore	century	centre	perhaps

Geography Homework:

Next week in geography we will be learning about river pollution. Research what river pollution is and what we can do to stop it. Write in bullet points.



Homework due: 13.03.18





08.03.18

Year 4

1. Read your reading book for 20 minutes each night.
2. Practise your times tables for 10 minutes each night on hit the button and complete your maths worksheet.
3. Practise your spellings.
4. If you can, play mathletics for about 10 minutes each night.
5. Practise your Ukulele every night for 5-10 minutes

Practise these spellings:

the that not look old too

Geography Homework:

Answer these questions about rivers:

1. Where do rivers start?
2. Where do rivers end?
3. What is a famous river in England?



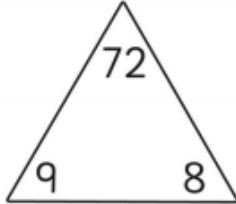
Homework due: 06.03.18



Maths Homework

08.03.18

Use the numbers inside the triangle to write down the multiplication and division facts that you know.

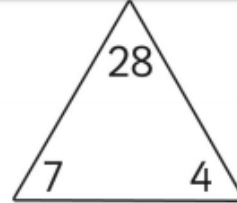


$$\square \times \square = \square$$

$$\square \times \square = \square$$

$$\square \div \square = \square$$

$$\square \div \square = \square$$

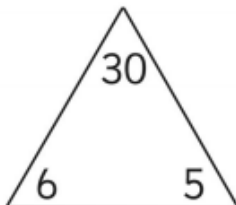


$$\square \times \square = \square$$

$$\square \times \square = \square$$

$$\square \div \square = \square$$

$$\square \div \square = \square$$

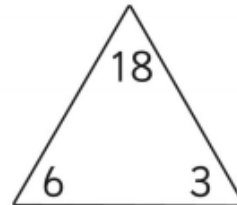


$$\square \times \square = \square$$

$$\square \times \square = \square$$

$$\square \div \square = \square$$

$$\square \div \square = \square$$



$$\square \times \square = \square$$

$$\square \times \square = \square$$

$$\square \div \square = \square$$

$$\square \div \square = \square$$

Maths Homework

08.03.18

Number Bonds to 20

Can you find the missing number bond to make 20?

